

.

ARMY PUBLIC SCHOOL RATNUCHAK

CLASS: III – 2023-24

WORKSHEET (MA)

SUBJECT: ENGLISH

NAME _____ SECTION _____ R.NO _____

Q1. Fill in the blanks with suitable verbs and the Present Continuous Tense form of the verbs given in the brackets. (3x1=3)

- a. She _____ for her exam. (is/am/are, study)
- b. My grandparents _____ in the afternoon. (is/am/are, arrive)
- c. I _____ the gift. (is/am/are, pack)

Q2. Choose the verb in Simple Present Tense from the brackets and complete the sentences.(2x1=2)

- a. The Earth _____ around the Sun. (revolve)
- b. The fluffy clouds _____ around. (move)

Q3. Write the simple past tense of the given words. (4x½=2)

- a. eat _____
- b. bring _____
- c. teach _____
- d. dry _____

Q4. Fill in the blanks with Past Continuous Tense form of the verbs given in the brackets. (3x1=3)

- a. The children _____ hide and seek in the park. (was/were, play)
- b. The gardener _____ the lawn. (was/were, water)
- c. The kid _____ television in the evening. (was/were, watch)

आर्मी पब्लिक स्कूल रतूचक
कक्षा-3 – 2023-24
कार्य पत्रक

नाम _____

अनुक्रमांक _____

प्र1. दिए गए राज्यों की भाषा लिखिए ।

पंजाब _____

गुजरात _____

प्र2. दिए गए वर्णों के समूह को सही क्रम में रखकर शब्द बनाइए ।

चाबगी _____

रचामास _____

प्र3. पर्यायवाची शब्द लिखिए ।

फूल _____

आशा _____

प्र4. नीचे दिए वाक्यों में विशेषण शब्द को रेखांकित करें ।

1. हमेशा साफ़ कपड़े पहनने चाहिए ।

2. मेरे पास एक लाल गुब्बारा है ।

प्र5. नीचे दिए वाक्यों में क्रिया शब्द को गोला लगाओ ।

1. राजन किताब पढ़ रहा है ।

2. बाहर बारिश हो रही है ।

ARMY PUBLIC SCHOOL RATNUCHAK

CLASS: III – 2023-24

WORKSHEET (MA)

SUBJECT: MATHEMATICS

NAME _____ SECTION _____ R.NO _____

1. _____ is an instrument used to measure weight.
2. The fractions that have the same value are called _____.
3. 1 Kg = _____ g
4. Tick the most likely measure for each item



- a. 1 L
- b. 200 mL
- c. 2 L



- a. 2 L
- b. 500 mL
- c. 8 L



- a. 15 L
- b. 200 mL
- c. 5 mL

5. Solve the following division problems with the help of figures

1. $30 \div 3 = \square$



2. $45 \div 5 = \square$



6. Write the correct unit – Cm , m , g , Kg , L , ml .

Juice in



100 _____

Weight of



2 _____

Length of



2 _____

Milk in



1 _____

ARMY PUBLIC SCHOOL RATNUCHAK

CLASS: III – 2023-24

WORKSHEET (MA)

SUBJECT: EVS

NAME _____ **SECTION** _____ **R.NO** _____

Q1: Tents are made up of which material?

Ans: _____

Q2: Name the states where you find house boats?

Ans: _____

Q3: Which planet is called as a blue planet?

Ans: _____

Q4: Mention any two methods of purifying water.

Ans: _____

Q5: Name any one international airport in India.

Ans: _____

Q6: Which language is used for deaf and dumb people?

Ans: _____

Q7: Write the full form of ISD.

Ans: _____

Q8: Which type of soil is used to make clay pots?

Ans: _____

Q9: Tie and dye is a special art of which place?

Ans: _____

Q10: Name any one means of air transport.

Ans: _____

MULTIPLE ASSESMENT

SUBJECT- ENGLISH


CLASS - IV - 2023-24

WORKSHEET (MA)

LET'S
TRY

NAME: _____ **SEC:** _____ **ROLL NO:** _____

Sandy, the seal has a box of questions. Let's help him to solve.



Q1. Fill in the blanks with the correct form of the verbs in Simple Present Tense:

1. I always _____ my friends. (help)
2. She _____ tea but not coffee. (like)
3. He _____ very hard for his examination. (work)

Q2. Fill in the blanks with the present continuous form of the verbs given in the brackets. Do not forget to use (is, am, are).

1. My friends _____ me. (call)
2. The farmer _____ in the field. (work)
3. It _____ outside. (rain)

Q3. Underline the verbs and write 'T' for transitive and 'IN' for intransitive verb.

1. No tomato is ripe. _____
2. Sherin bought a phone for her mother. _____
3. The cat chased the mouse around the house. _____

Q4. Write the antonyms of the following words.

1. Inflated - _____
2. Victorious - _____

आर्मी पब्लिक स्कूल रतूचक

कक्षा-3 - 2023-24

कार्य पत्रक

नाम _____

अनुक्रमांक _____

1 वाक्यांश के लिए एक शब्द लिखिए लिखिए।

जो अनाज उगाता है _____

जो सदा सच बोलता है _____

जो कविता लिखता है _____

2 दिए गए शब्दों के दो-दो पर्यायवाची शब्दों पर गोला लगाइए ।

पहाड़ पर्वत अनल अचल

घोड़ा तन अश्व हय

अध्यापक गुरु शिक्षक नृप

3 दिए गए शब्दों के दो अलग-अलग अर्थ लिखिए ।

पूर्व _____

आम _____

4 परिवार के सदस्यों के जन्म की तारीख संकेत के अनुसार लिखिए -

12-06-2023

१२ जून, २०२३

अपनी जन्मतिथि _____

माँ की जन्मतिथि _____

पिता की जन्मतिथि _____

भाई/बहन की जन्मतिथि _____

MULTIPLE ASSESMENT

SUBJECT- MATHEMATICS

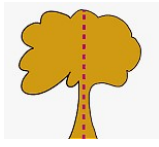
CLASS – IV – 2023-24

WORKSHEET (MA)

NAME: _____ **SEC:** _____ **ROLL NO:** _____

Q1. Diameter = _____ of Radius.

Q2. Rectangle has _____ lines of symmetry.

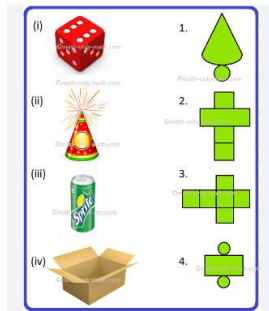


Q3. _____ is asymmetrical figure (True / False)

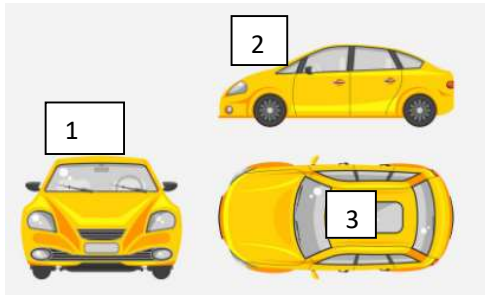


Q4. _____ Given figure shows _____ symmetry.

Q5. Match the 3- D objects with their respective NeT



Q6. Write the different view of given figure. (top , side , front)



1. _____ , 2. _____ , 3. _____

Q7. _____ has one fixed point.

Q8. Longest chord of a circle is _____.

Q9. If radius of circle is 5cm then diameter = _____.

MULTIPLE ASSESMENT

SUBJECT- EVS

CLASS - IV - 2023-24

WORKSHEET (MA)

NAME: _____ **SEC:** _____ **ROLL NO:** _____

Q1. Name the following:

_____ , _____

b. Water purification methods

_____ , _____

Q2. Identify the picture. Write their names and uses.



a) _____

b) _____



c) _____

d) _____

ARMY PUBLIC SCHOOL RATNUCHAK

SESSION (2023-24)

SUBJECT: ENGLISH

CLASS: V

WORKSHEET (MA)

NAME _____ SECTION _____ R.NO _____

Q. Using the verb given in the brackets, fill in the blanks with the correct form of Tense as mentioned in the brackets. (5marks)

1. I _____ (like) to eat an apple daily. (Simple Present)
2. They _____ (chase) the thief since morning. (Past Perfect Continuous)
3. Ramta _____ (complete) her work by this evening. (Future Continuous)
4. John _____ (fall) into the ditch. (Simple Past)
5. The train _____ (leave) before I reached the station. (Past Perfect)

Q2: John wants to make a vegetable sandwich for his mother, but he does not know how to make one. Help him by telling him the steps, using the simple present tense: (5marks)

Place, slice, mix, cut, sprinkle, grate, spread,

grill, chop



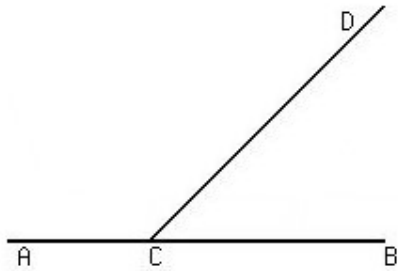
आर्मी पब्लिक स्कूल रतूचक

कक्षा-5

कार्य पत्रक

NAME _____ SECTION _____ R.NO _____

1. Measure of straight angle is _____.
2. How many obtuse angles are there in a triangle? _____ -
3. All angles of rectangle is _____ angle.
4. Write the name of all the angles formed in the given figure.



_____ , _____ , _____

5. All chords of circle are of same length. (True or False)
6. In $\triangle DEF$, if $DE = EF = FD = 7$ cm , it is a / an _____ triangle.
7. If a triangle has angles 65° and 43° , then the third angle is _____.
8. Match

A	B
Polygon	Diameter
Longest chord	Closed figure
Obtuse angle	Line segment
Fixed length	100°

9. Write the type of angle formed in the given figure.



10. Sides of triangle are always equal. (True or False)

ARMY PUBLIC SCHOOL RATNUCHAK

SESSION (2023-24)

SUBJECT: EVS

CLASS: V

WORKSHEET (MA)

NAME _____

SECTION _____

R.NO _____

Q1. What is the chemical name of vinegar?

Ans: _____

Q2. Which materials are used to build huts?

Ans: _____

Q3. Name two objects which sink in water.

Ans: _____

Q4. Name an aquatic plant which floats.

Ans: _____

Q5. Write the other name for baoli.

Ans:- _____

Q6. Name a crop which needs a lot of water to grow.

Ans:- _____

Q7. Name the nerves which carry messages from sense organs to brain.

Ans:- _____

Q8. Write the other name for food pipe.

Ans:- _____

Q9. Name one animal which hibernates.

Ans:- _____

Q10. Name the only moveable bone of our face.

Ans:- _____